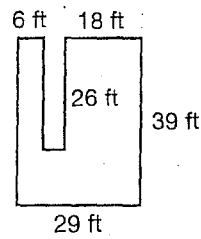


**Practice
5-10**

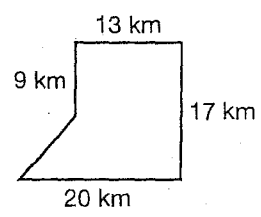
Problem-Solving: Areas of Irregular Figures

Find the area of each figure.

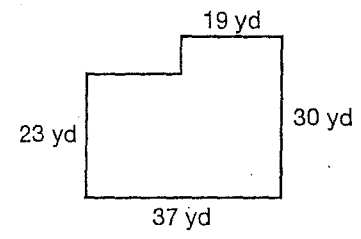
1. _____



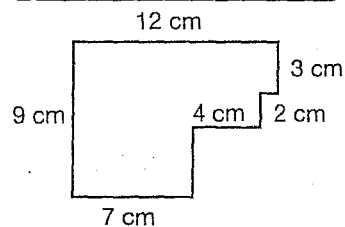
2. _____



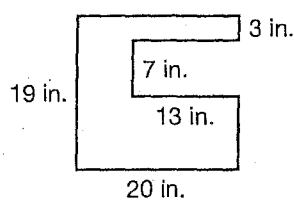
3. _____



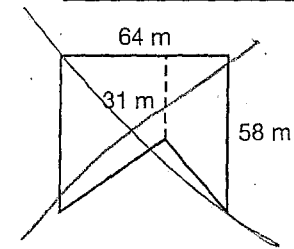
4. _____



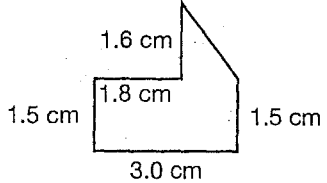
5. _____



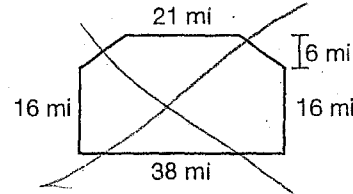
6. _____



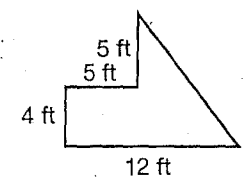
7. _____



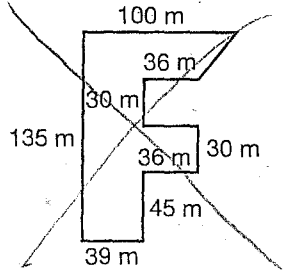
8. _____



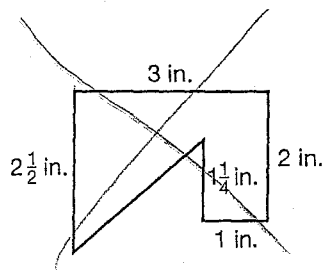
9. _____



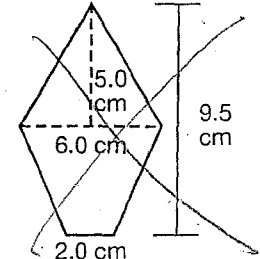
10. _____




11. _____



12. _____



13. The flag of Switzerland features a white cross on a red background.



a. Each of the 12 sides of the cross has length 15 cm. Find the area of the white cross. _____

b. The flag has dimensions 60 cm by 60 cm. Find the area of the red region. _____